

Xalq Ta'limi vazirligi Fan olimpiadalari bo'yicha iqtidorli o'quvchilar bilan ishlash departamentining haftalik olimpiadasi topshiriqlarining yechimlari

10-11 sinf o'quvchilari uchun

1. Aytaylik $A = 1 + \cos \frac{4\pi}{19} + \cos \frac{6\pi}{19} - \cos \frac{9\pi}{19}$, $B = 1 + \cos \frac{2\pi}{19} - \cos \frac{3\pi}{19} - \cos \frac{5\pi}{19}$ va $C = 1 + \cos \frac{\pi}{19} - \cos \frac{7\pi}{19} + \cos \frac{8\pi}{19}$ bo'lsin. U holda quyidagi tenglikni isbotlang:

$$\left(\sqrt[3]{A} + \sqrt[3]{B} + \sqrt[3]{C}\right)^3 = \frac{3\sqrt[3]{19} - 1}{2}$$

Yechimi: $\cos x = \cos(\pi - x)$ ayniyatga ko'ra A , B , C ifodalarni quyidagicha yozib olamiz:

$$A = 1 - \left(\cos \frac{15\pi}{19} + \cos \frac{13\pi}{19} + \cos \frac{9\pi}{19}\right) \quad (1)$$

$$B = 1 - \left(\cos \frac{17\pi}{19} + \cos \frac{3\pi}{19} + \cos \frac{5\pi}{19}\right) \quad (2)$$

$$C = 1 - \left(\cos \frac{18\pi}{19} + \cos \frac{7\pi}{19} + \cos \frac{11\pi}{19}\right) \quad (3)$$

Quyidagi belgilashlarni olaylik:

$$x_1 = \cos \frac{15\pi}{19} + \cos \frac{13\pi}{19} + \cos \frac{9\pi}{19} \quad (4)$$

$$x_2 = \cos \frac{17\pi}{19} + \cos \frac{3\pi}{19} + \cos \frac{5\pi}{19} \quad (5)$$

$$x_3 = \cos \frac{18\pi}{19} + \cos \frac{7\pi}{19} + \cos \frac{11\pi}{19} \quad (6)$$

U holda x_1 , x_2 , x_3 sonlar

$$x^3 - x^2 - 6x + 7 = 0 \quad (7)$$

tenglamaning ildizlari ekanligini tekshirib ko‘rishimiz mumkin. $i = 1, 2, 3$ indekslar uchun $y_i = 2 - x_i$ almashtirish bajarsak,

$$x^3 - x^2 - 6x + 7 = 0 \Rightarrow y^3 - 5y^2 + 2y + 1 = 0 \quad (7')$$

munosabatni topamiz. Qulaylik uchun

$$\sqrt[3]{y_1} = a, \sqrt[3]{y_2} = b, \sqrt[3]{y_3} = c \quad (8)$$

belgilashni kiritaylik. U holda masala

$$a + b + c = \sqrt[3]{3 \cdot \sqrt[3]{19} + 1} \quad (9)$$

tenglikni isbotlashga teng kuchli. Viyet teoremasiga ko‘ra quyidagi tenglikni topamiz:

$$\begin{cases} a^3 + b^3 + c^3 = y_1 + y_2 + y_3 = 5 \\ a^3b^3 + b^3c^3 + c^3a^3 = y_1y_2 + y_2y_3 + y_3y_1 = 2 \\ a^3b^3c^3 = y_1y_2y_3 = -1 \end{cases} \quad (10)$$

Quyidagi yordamchi parametrlarni belgilaymiz:

$$\begin{cases} p = a + b + c \\ q = ab + bc + ca \\ r = abc = -1 \end{cases} \quad (11)$$

U holda

$$\begin{cases} p^3 - 3pq - 3 = p(p^2 - 3q) + 3abc = a^3 + b^3 + c^3 = 5 \\ q^3 + 3pq + 3 = q(q^2 - 3rp) + 3r^2 = a^3b^3 + b^3c^3 + c^3a^3 = 2 \\ r = -1 \end{cases} \Rightarrow \begin{cases} p^3 - 3pq = 8 \\ q^3 + 3pq = -1 \\ r = -1 \end{cases} \quad (12)$$

$$\begin{cases} p^3 + q^3 = 7 \\ (p^3 - 8)^3 = 27p^3q^3 = 27p^3(7 - p^3) \end{cases} \Rightarrow (p^3 + 1)^3 = 513 = 27 \cdot 19 \Rightarrow p = \sqrt[3]{3 \cdot \sqrt[3]{19} - 1} \quad (13)$$

Masala to‘liq yechildi.

2. $\{1, 2, 3, 4, 5, 6, 7, 8, 9, 10, 11\}$ to‘planning shunday qism to‘plamlari sonini topingki, unda ketma-ket kelgan ikkita son yotmasin.

Yechimi: Masalani umumiy holatda yechamiz. Ketma-ket kelgan sonni o‘z ichiga olmaydigan to‘plamni *yaxshi* to‘plam deylik. $A_n = \{1, 2, \dots, n\}$ to‘planning *yaxshi* qism to‘plamlari sonini $f(n)$ bilan belgilaylik. Biz $A_{n+2} = \{1, 2, \dots, n+2\}$ to‘plam uchun *yaxshi* qism to‘plamlar sonini, ya’ni $f(n+2)$ ni hisoblaymiz. A_{n+2} to‘planning $n+2$ ni o‘z ichiga

olmagan **yaxshi** qism to'plamlari $A_{n+1} = \{1, 2, \dots, n+1\}$ to'plamning ham yaxshi qism to'plami bo'ladi, ya'ni ular $f(n+1)$ ta. Boshqa tomondan A_{n+2} to'plamning $n+2$ ni o'z ichiga olgan **yaxshi** qism to'plamlari $n+1$ ni o'z ichiga olmaydi, ya'ni $n+2$ ni hisobga olmaganda $A_n = \{1, 2, \dots, n\}$ to'plamning yaxshi qism to'plamlari bo'ladi, ya'ni ularning soni $f(n)$ ta. Demak $f(n+2) = f(n+1) + f(n)$ rekkurent formula o'rinli. Endi boshlang'ich qiymatlarini hisoblaymiz:

$$A_1 = \{1\} \text{ to'plamning yaxshi qism to'plamlari: } \{1\} \text{ va } \emptyset \Rightarrow f(1) = 2 \quad (14)$$

$$A_2 = \{1, 2\} \text{ to'plamning yaxshi qism to'plamlari: } \{1\}, \{2\} \text{ va } \emptyset \Rightarrow f(2) = 3 \quad (15)$$

U holda $f(3) = 2 + 3 = 5$, $f(4) = 8$, $f(5) = 13$, $f(11) = 233$.

Javob: $f(11) = 233$

3. $y^3 - 2x^2 = 5$ tenglamaning barcha butun yechimlarini toping.

Yechimi: Natural sonning kvadratini 8 ga bo'lgandagi qoldirlarni tekshirish orqali

$$y^3 = 2x^2 + 5 \in \{5, 7\} \pmod{8} \quad (16)$$

munosabatni topamiz. Demak $y \in \{5, 7\} \pmod{8}$ munosabat o'rinli. Aytaylik $y \equiv 5 \pmod{8}$ bo'lsin. Bu holda

$$y^2 + y + 1 \equiv 7 \pmod{8} \quad (17)$$

bo'lib, u $p \in \{5, 7\} \pmod{8}$ ko'rinishidagi tub bo'luvchiga ega. U holda

$$(y-1)(y^2 + y + 1) = 2(x^2 + 2) \quad (18)$$

Tenglikka ko'ra, $x^2 + 2$ ham $p \in \{5, 7\} \pmod{8}$ ga bo'linadi, ya'ni

$$\left(\frac{-2}{p}\right) = 1 \quad (19)$$

bo'lishi kerak. Lekin oxirgi tenglik faqatgina $p \in \{1, 3\} \pmod{8}$ holdagina bajariladi.

$y \equiv 7 \pmod{8}$ bo'lgan holni o'quvchilar mustaqil yechishlari uchun qoldiramiz.

4. $(1 + x + x^2 + x^3 + x^4 + x^5)^{402} = a_{2010}x^{2010} + a_{2009}x^{2009} + \dots + a_1x + a_0$ ko'phadni qaraylik. U holda quyidagi nisbatni hisoblang:

$$\frac{a_1 + 2a_2 + \dots + 2009a_{2009} + 2010a_{2010}}{a_0 + a_1 + a_2 + \dots + a_{2010}}$$

Yechimi: Masalada berilgan ko'phadni quyidagicha belgilaylik:

$$P(x) = (1 + x + x^2 + x^3 + x^4 + x^5)^{402} = a_{2010}x^{2010} + a_{2009}x^{2009} + \dots + a_1x + a_0 \quad (20)$$

Quyidagi tengliklar o'rinli ekanligiga ishonch hosil qilish mumkin:

$$P'(x) = 2010a_{2010}x^{2009} + 2009a_{2009}x^{2008} + \dots + 2a_2 + a_1 \Rightarrow$$

$$P'(1) = a_1 + 2a_2 + \dots + 2009a_{2009} + 2010a_{2010} \quad (21)$$

$$P(1) = a_0 + a_1 + a_2 + \dots + a_{2010} = (1 + 1 + 1 + 1 + 1 + 1)^6 = 6^6 \quad (22)$$

Hosilani va uning 1 dagi qiymatini hisoblaymiz:

$$P'(x) = 402(1 + x + x^2 + x^3 + x^4 + x^5)^{401} \cdot (5x^4 + 4x^3 + 3x^2 + 2x + 1) \Rightarrow$$

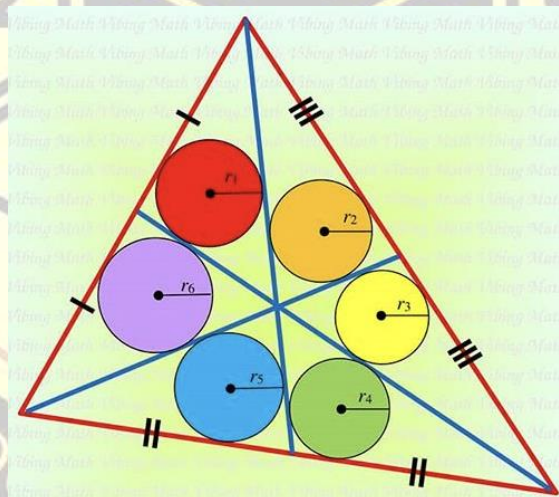
$$P'(1) = 402 \cdot 6^{401} \cdot 15 \quad (23)$$

Demak

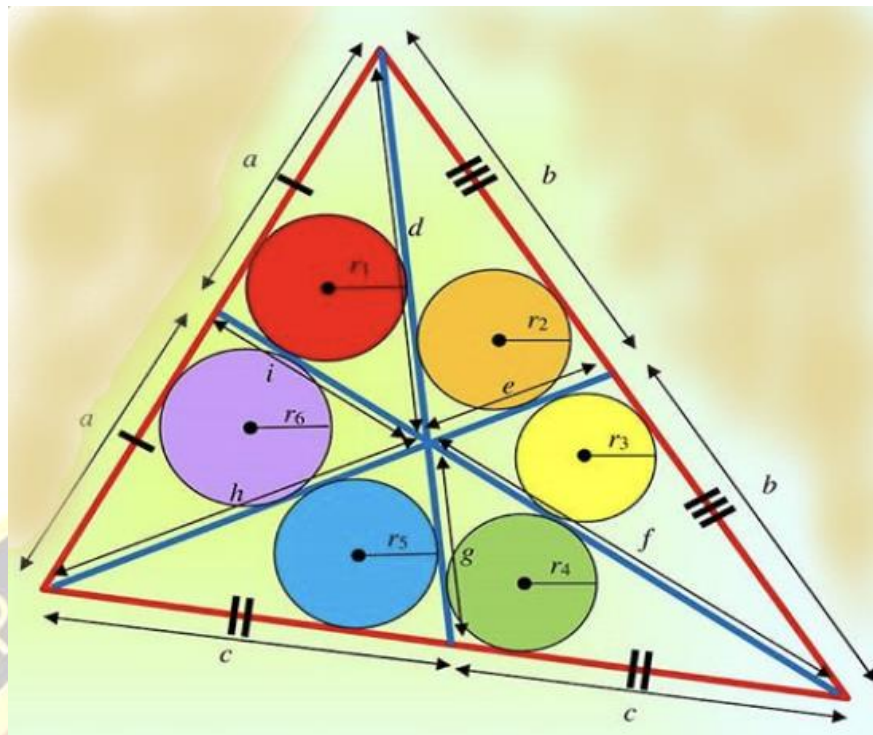
$$\frac{a_1 + 2a_2 + \dots + 2009a_{2009} + 2010a_{2010}}{a_0 + a_1 + a_2 + \dots + a_{2010}} = \frac{402 \cdot 6^{401} \cdot 15}{6^{402}} = 1005 \quad (24)$$

Javob: 1005

5. Quyidagi chizmaga asosan $\frac{1}{r_1} + \frac{1}{r_3} + \frac{1}{r_5} = \frac{1}{r_2} + \frac{1}{r_4} + \frac{1}{r_6}$ tenglikni isbotlang.



Yechimi: Kesmalarni quyidagi chizmadagidek belgilab olaylik.



Uchburchak medianasining xossasiga ko'ra chizmadagi oltita uchburchak yuzalari bir xil. Ularni S bilan belgilaylik. Uchburchak yuzasi va ichki chizilgan aylanasi radiuslari orasidagi bog'lanishga ko'ra

$$\frac{1}{r_1} = \frac{a+d+i}{2S}, \quad \frac{1}{r_3} = \frac{b+e+f}{2S}, \quad \frac{1}{r_5} = \frac{c+g+h}{2S} \quad (25)$$

va

$$\frac{1}{r_2} = \frac{b+d+e}{2S}, \quad \frac{1}{r_4} = \frac{f+c+g}{2S}, \quad \frac{1}{r_6} = \frac{a+h+i}{2S} \quad (26)$$

tengliklarni topamiz. U holda

$$\frac{1}{r_1} + \frac{1}{r_3} + \frac{1}{r_5} = \frac{a+d+i+b+e+f+c+g+h}{2S} \quad (27)$$

va

$$\frac{1}{r_2} + \frac{1}{r_4} + \frac{1}{r_6} = \frac{b+d+e+f+c+g+a+h+i}{2S} \quad (28)$$

Demak

$$\frac{1}{r_1} + \frac{1}{r_3} + \frac{1}{r_5} = \frac{1}{r_2} + \frac{1}{r_4} + \frac{1}{r_6} \quad (29)$$

tenglik o'rinli ekan. Masala sharti to'liq isbotlandi.

7-9 sinf o'quvchilari uchun

1. $x^3 - 1 = \sqrt{x}(5x - 3x^2 - 3)$ tenglamani yeching.

Yechimi: Tenglama berilishiga ko'ra $x > 0$ va $\sqrt{x} = m$ kabi belgilaylik. U holda berilgan tenglama

$$m^6 + 3m^5 - 5m^3 + 3m - 1 = 0 \quad (30)$$

ko'rinishga keladi. $m \neq 0$ ekanligini inobatga olib, (30) tenglamaning har ikkala tarafini m^3 ga bo'lamiz:

$$m^3 - \frac{1}{m^3} + 3\left(m^2 + \frac{1}{m^2}\right) - 5 = 0 \quad (31)$$

Endi $m - \frac{1}{m} = n$ belgilash kiritib,

$$m^3 - \frac{1}{m^3} = \left(m - \frac{1}{m}\right)^3 + 3\left(m - \frac{1}{m}\right) = n^3 + 3n \quad (32)$$

$$m^2 + \frac{1}{m^2} = \left(m - \frac{1}{m}\right)^2 + 2 = n^2 + 2 \quad (33)$$

ayniyatlardan foydalansak () tenglama quyidagi ko'rinishga keladi:

$$n^3 + 3n + 3(n^2 + 2) - 5 = 0 \quad (34)$$

yoki

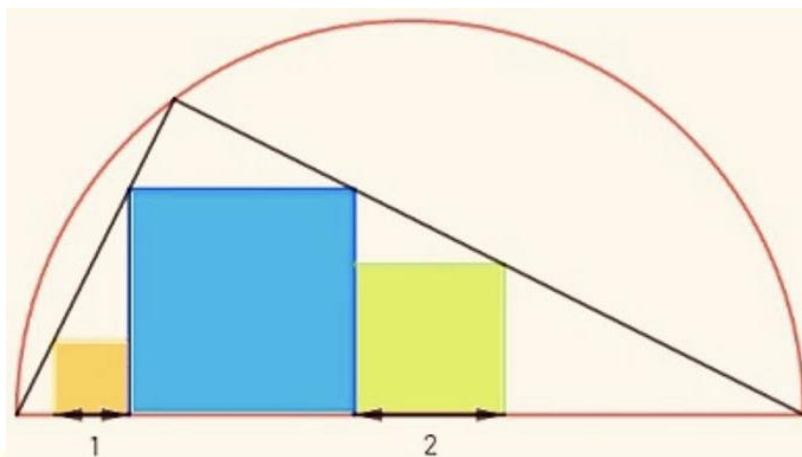
$$n^3 + 3n + 3n^2 + 1 = 0 \Rightarrow (n+1)^3 = 0 \Rightarrow n = -1 \quad (35)$$

Demak

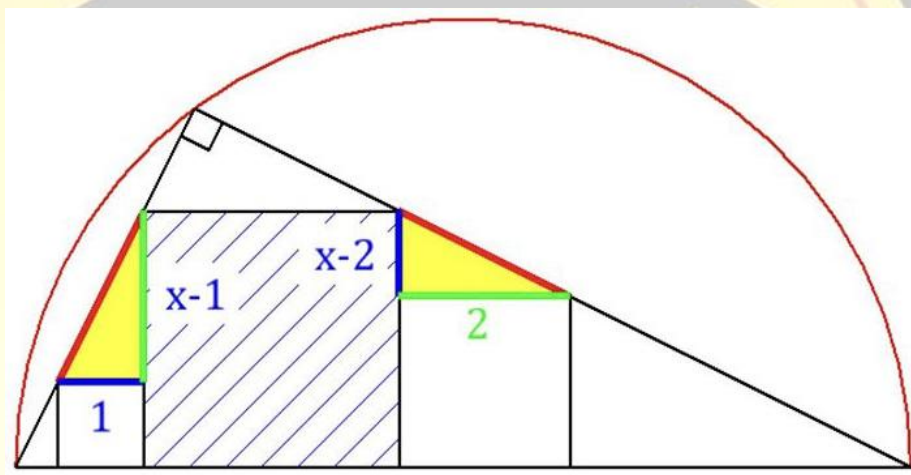
$$m - \frac{1}{m} = -1 \Rightarrow m^2 + m - 1 = 0 \Rightarrow \langle m > 0 \rangle \Rightarrow x = m^2 = \left(\frac{\sqrt{5}-1}{2}\right)^2 \quad (36)$$

$$\text{Javob: } x = \frac{3-\sqrt{5}}{2}$$

2. Chizmadagi ma'lumotlarga asosan ko'k rangli kvadrat yuzini toping.



Yechimi: Dastlab masalaga mos chizma chizib olaylik, bu yerda x -ko'k rangli kvadratning tomoni uzunligi. U holda burchaklarni hisoblash orqali sariq rangli uchburchaklar o'xshashligini aniqlash qiyin emas.



U holda o'xshashlikka ko'ra

$$\frac{1}{x-1} = \frac{x-2}{2} \Rightarrow (x-1)(x-2) = 2 \Rightarrow x(x-3) = 0 \Rightarrow \begin{cases} x=0 \Rightarrow \emptyset \\ x=3 \end{cases} \quad (37)$$

Demak kvadratning yuzasi 9 ga teng.

Javob: 9

3. Agar $\frac{1}{7} = 0,142857\dots$ bo'lsa, u holda verguldan keyingi 2020-xonadagi raqamni toping.

Yechimi: Faraz qilaylik 2020-xonadagi raqam x bo'lsin. U holda

$$\frac{1}{7} = 0,142857\dots x\dots \Rightarrow \frac{6}{7} = 0,857142\dots \quad (38)$$

$$10^6 \equiv 1 \pmod{7} \Rightarrow 10^{2019} \equiv 10^3 \equiv 6 \pmod{7} \quad (39)$$


Demak

$$\frac{10^6 - 6}{7} \in \mathbb{Z} \Rightarrow 142857\dots, x\dots - 0,857142\dots \in \mathbb{Z} \Rightarrow \quad (40)$$


$$0, x\dots = 0,857142\dots \Rightarrow x = 8 \quad (40')$$

Javob: 8

4. Quyidagi 100 ta katakdan iborat **A shakl**ni 4 ta katakdan iborat **L** simon **B shakl**dagidagi 25 ta bo'lakka bo'lish mumkinmi? Bunda B shaklni burish mumkin, lekin ustma-ust qo'yish mumkin emas. Javobingizni isbotlang.




A shakl




B shakl

Yechimi: Teskarisini faraz qilaylik, masala shartini bajarish mumkin bo'lsin. **A shakl**ni quyidagi usulda yashil va qizil ranglarga bo'yaylik.



A shakl

U holda **B shakl** qanday tarzda joylashishiga bog'lik quyidagi hollar bo'lishi mumkin:



yoki ularning burilishlaridan iborat. Demak qanday holatda ham, 3 ta yashil va 1 ta qora yoki 3 qizil va 1 ta yashil ranglardan tashkil topishi mumkin ekan. 3 ta yashil rangli katakni o'z ichiga olgan **B shakllar** sonini g va 3 ta qizil rangli katakni o'z ichiga olgan **B shakllar** soni r bo'lsin. U holda qizil va yashil rangli kataklar sonini hisoblaymiz:

$$\begin{cases} 3r + q = 50 \\ 3q + r = 50 \end{cases} \Rightarrow q = r = \frac{25}{2} \Rightarrow \emptyset \quad (41)$$

ziddiyat. Demak farazimiz noto'g'ri.

5. Agar $a > b$ natural sonlar uchun $(a^2 + 1)(b^2 + 1)$ ko'paytma biror natural sonning kvadratiga teng bo'lsa, u holda $a > 5b$ tengsizlikni isbotlang.

Yechimi: Quyidagi ifodani qaraylik:

$$c^2 = (a^2 + 1)(b^2 + 1) = (ab + 1)^2 + (a - b)^2 > (ab + 1)^2 \quad (42)$$

Demak

$$c^2 = (a^2 + 1)(b^2 + 1) \geq (ab + 2)^2 \quad (43)$$

Tengsizlik o'rinli. Faraz qilaylik tenglik holi bajarilsin, u holda

$$(a^2 + 1)(b^2 + 1) = (ab + 2)^2 \Rightarrow a^2 + b^2 = 4ab + 3 \Rightarrow \emptyset \quad (44)$$

Chunki, ikkita sonning kvadratlari yig'indisini 4 ga bo'lganda 3 qoldiq qolmaydi. Demak

$$(a^2 + 1)(b^2 + 1) \geq (ab + 3)^2 \Rightarrow a^2 + b^2 = 6ab + 8 > 6ab \Rightarrow$$

$$\left\langle \frac{a}{b} = x \right\rangle \Rightarrow x^2 + 1 > 6x \Rightarrow (x - 3)^2 > 8 \Rightarrow x > 3 + 2\sqrt{2} > 5 \quad (45)$$

4-6 sinf o'quvchilari uchun

1. Quyidagi rebusni yeching:

$$\begin{array}{r} A A A A \\ + A A A B \\ \hline C C C C C \end{array}$$

Yechimi: Agar ikkita to'rt xonali son yig'indisi besh xonali bo'lsa, u holda ushbu besh xonali sonning birinchi raqami 1 ga teng bo'ladi. Demak $C = 1$. U holda

$$\overline{AAAA} + \overline{AAAB} = 11111 \Rightarrow 2221 \cdot A + B = 11111 \quad (46)$$

Tekshirib ko'rish orqali $A = 5$ va $B = 6$ tengliklarni topamiz.

2. To'rtta 4 raqami va arifmetik amallardan foydalanib 0, 1, 2, ... 19, 20 sonlarini hosil qiling. (Masalan $4! - 4 - 4 : 4 = 19$)

Yechimi: Quyidagi hosil qilish usuli keltirilgan.

$(4 + 4) - (4 + 4) = 0$	$(44 - 4) : 4 = 10$
$(4 + 4) : (4 + 4) = 1$	$44 : (\sqrt{4} \cdot \sqrt{4}) = 11$
$4 : 4 + 4 : 4 = 2$	$4 \cdot (4 - 4 : 4) = 12$
$4 - 4^{4-4} = 3$	$44 : 4 + \sqrt{4} = 13$
$4 + (4 - 4) \cdot 4 = 4$	$4 + 4 + 4 + \sqrt{4} = 14$
$4 + 4^{4-4} = 5$	$44 : 4 + 4 = 15$
$4 + (4 + 4) : 4 = 6$	$4 \cdot 4 + 4 - 4 = 16$
$4 + 4 - 4 : 4 = 7$	$4 \cdot 4 + 4 : 4 = 17$
$4 + 4 + 4 - 4 = 8$	$4 \cdot 4 + 4 - \sqrt{4} = 18$
$4 + 4 + 4 : 4 = 9$	$4! - 4 - 4 : 4 = 19$
$4 \cdot 4 + \sqrt{4} + \sqrt{4} = 20$	

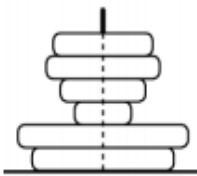
Albatta bu yagona yechim emas.

3. Nodir 2, 0, 1 va 8 raqamlari yordamida 2 xonali son tuzmoqda. Bu son 10 dan katta ammo 25 dan kichik bo'lishi kerak. Har bir son 2 ta turli raqamdan tuziladi. Nodir necha xil usulda shunday sonlarni tuzishi mumkin?

Yechimi: Masala shartini qanoatlantiruvchi sonlar:

Javob: 4 ta

4. Dilshod quyidagi o'yinchoq minorani disklar yordamida qurdi va bu minoraga tepadan qaradi. U nechta diskni ko'radi?

*Javob: 2 ta*

5. Fermada 15 ta hayvon yashaydi: sigirlar, mushuklar va kengurular. 10 ta hayvon sigir emas va 8 ta hayvon mushuk emas. Fermadagi kengurular sonini toping.

Yechimi: Masala bir qarashda xatodek ko'rinishi mumkin. Lekin diqqat bilan tushunib o'qisangiz asl ma'nosiga tushunasiz. 10 ta hayvon sigir emas degani, mushuklar va kengurular jami 10 ta degani, ya'ni 5 tasi sigir ekan. Xuddi shunday 8 ta hayvon mushuk emas degani, sigirlar va kengurular 8 ta degani, ya'ni mushuklar $15-8=7$ ta degani. U holda kengurular soni $15-5-7=3$ ta ekan.

Javob: 3 ta.

Fan olimpiadalari bo'yicha iqtidorli o'quvchilar bilan ishlash departamenti sizga omadlar tilaydi!